

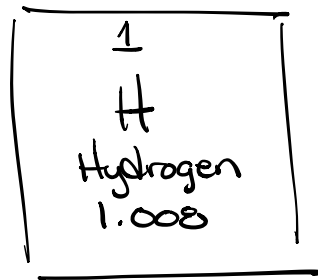
# Elements & The Periodic Table

118 Known Elements

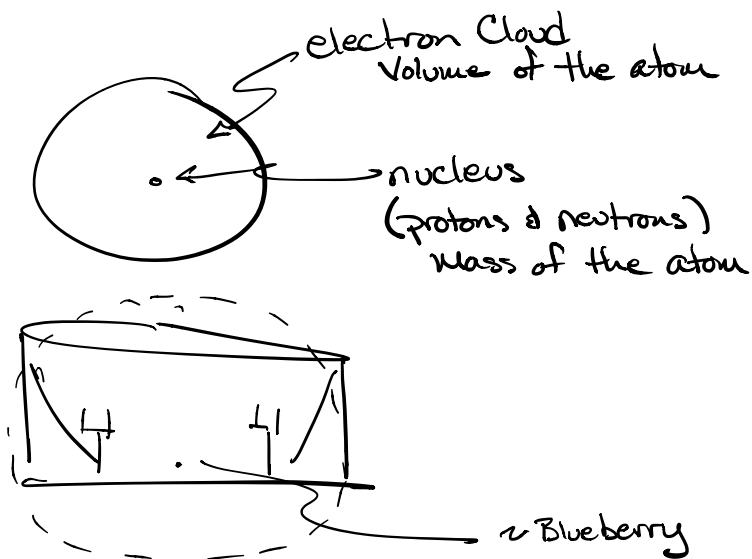
Where do elements come from?

## Big Bang

- Initial too hot to form elements
- After cooling the first element formed  
⇒ Hydrogen element #1



Hydrogen has  
1 proton + charge  
1 electron - charge  
0 neutrons




# Group

1A

18

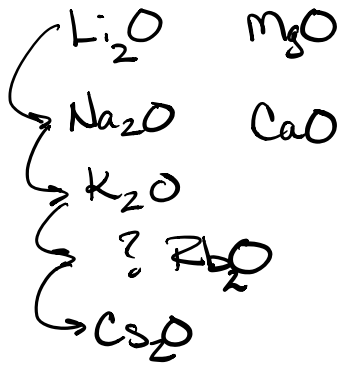
8A

1 H Hydrogen 1.008	2 He Helium 4.003											13 3A	14 4A	15 5A	16 6A	17 7A	18 8A
3 Li Lithium 6.941	4 Be Beryllium 9.012											5 B Boron 10.81	6 C Carbon 12.01	7 N Nitrogen 14.01	8 O Oxygen 16.00	9 F Fluorine 19.00	10 Ne Neon 20.18
11 Na Sodium 22.99	12 Mg Magnesium 24.30	3 3B	4 4B	5 5B	6 6B	7 7B	8 8B	9 8B	10 8B	11 1B	12 2B	13 Al Aluminum 26.98	14 Si Silicon 28.09	15 P Phosphorus 30.97	16 S Sulfur 32.07	17 Cl Chlorine 35.45	18 Ar Argon 39.95
19 K Potassium 39.10	20 Ca Calcium 40.08	21 Sc Scandium 44.96	22 Ti Titanium 47.87	23 V Vanadium 50.94	24 Cr Chromium 52.00	25 Mn Manganese 54.94	26 Fe Iron 55.84	27 Co Cobalt 58.93	28 Ni Nickel 58.69	29 Cu Copper 63.55	30 Zn Zinc 65.39	31 Ga Gallium 69.72	32 Ge Germanium 72.61	33 As Arsenic 74.92	34 Se Selenium 78.96	35 Br Bromine 79.90	36 Kr Krypton 83.80
37 Rb Rubidium 85.47	38 Sr Strontium 87.62	39 Y Yttrium 88.91	40 Zr Zirconium 91.22	41 Nb Niobium 92.91	42 Mo Molybdenum 95.95	43 Tc Technetium 97.91	44 Ru Ruthenium 101.1	45 Rh Rhodium 102.9	46 Pd Palladium 106.4	47 Ag Silver 107.9	48 Cd Cadmium 112.4	49 In Indium 114.8	50 Sn Tin 118.7	51 Sb Antimony 121.8	52 Te Tellurium 127.6	53 I Iodine 126.9	54 Xe Xenon 131.3
55 Cs Cesium 132.9	56 Ba Barium 137.3																
87 Fr Francium 223	88 Ra Radium 226																
		72 Hf Hafnium 178.5	73 Ta Tantalum 180.9	74 W Tungsten 183.8	75 Re Rhenium 186.2	76 Os Osmium 190.2	77 Ir Iridium 192.2	78 Pt Platinum 195.1	79 Au Gold 197.0	80 Hg Mercury 200.6	81 Tl Thallium 204.4	82 Pb Lead 207.2	83 Bi Bismuth 209.0	84 Po Polonium 209	85 At Astatine 210	86 Rn Radon 222	
		104 Rf Rutherfordium 261	105 Db Dubnium 262	106 Sg Seaborgium 263	107 Bh Bohrium 262	108 Hs Hassium 265	109 Mt Meitnerium 266	110 Ds Darmstadtium 269	111 Rg Roentgenium 272	112 Cn Copernicium 277	113 Nh Nihonium 289	114 Fl Flerovium 289	115 Mc Moscovium 289	116 Lv Livermorium 289	117 Ts Tennessine 289	118 Og Oganesson 289	
Lanthanides		57 La Lanthanum 138.9	58 Ce Cerium 140.1	59 Pr Praseodymium 140.9	60 Nd Neodymium 144.2	61 Pm Promethium 145	62 Sm Samarium 150.4	63 Eu Europium 152.0	64 Gd Gadolinium 157.2	65 Tb Terbium 158.9	66 Dy Dysprosium 162.5	67 Ho Holmium 164.9	68 Er Erbium 167.3	69 Tm Thulium 168.9	70 Yb Ytterbium 173.0	71 Lu Lutetium 175.0	
Actinides		89 Ac Actinium 227	90 Th Thorium 232.0	91 Pa Protactinium 231.0	92 U Uranium 238.0	93 Np Neptunium 237	94 Pu Plutonium 244	95 Am Americium 243	96 Cm Curium 247	97 Bk Berkelium 247	98 Cf Californium 251	99 Es Einsteinium 252	100 Fm Fermium 257	101 Md Mendelevium 258	102 No Nobelium 259	103 Lr Lawrencium 262	



Mendeleev

Family "Group"  $\Rightarrow$  arranged in similar chemical reactivity



Li  
Na  
K  
Rb  
Cs

Groups  $\downarrow$

1A 18 8A

1A-8A main Group or Representative

periods  $\rightarrow$

Transition Elements

1	2	3	4	5	6	7	8	9	10	11	12	13	14	15	16	17	18
1A	2A	3B	4B	5B	6B	7B	8B	8B	8B	1B	2B	3A	4A	5A	6A	7A	8A
1	2	3	4	5	6	7	8	9	10	11	12	13	14	15	16	17	18
H Hydrogen 1.008	He Helium 4.003	Transition Elements										B Boron 10.81	C Carbon 12.01	N Nitrogen 14.01	O Oxygen 16.00	F Fluorine 19.00	Ne Neon 20.18
Li Lithium 6.941	Be Beryllium 9.012	Sc Scandium 44.96	Ti Titanium 47.87	V Vanadium 50.94	Cr Chromium 52.00	Mn Manganese 54.94	Fe Iron 55.84	Co Cobalt 58.93	Ni Nickel 58.69	Cu Copper 63.55	Zn Zinc 65.39	Al Aluminum 26.98	Si Silicon 28.09	P Phosphorus 30.97	S Sulfur 32.07	Cl Chlorine 35.45	Ar Argon 39.95
Na Sodium 22.99	Mg Magnesium 24.31	Ca Calcium 40.08	Y Yttrium 88.91	Zr Zirconium 91.22	Nb Niobium 92.91	Mo Molybdenum 95.95	Tc Technetium 97.91	Ru Ruthenium 101.1	Rh Rhodium 102.9	Pd Palladium 106.4	Ag Silver 107.9	Ga Gallium 69.72	Ge Germanium 72.61	As Arsenic 74.92	Se Selenium 78.96	Br Bromine 79.90	Kr Krypton 83.80
K Potassium 39.10	Ca Calcium 40.08	Sc Scandium 44.96	Ti Titanium 47.87	V Vanadium 50.94	Cr Chromium 52.00	Mn Manganese 54.94	Fe Iron 55.84	Co Cobalt 58.93	Ni Nickel 58.69	Cu Copper 63.55	Zn Zinc 65.39	Ga Gallium 69.72	Ge Germanium 72.61	As Arsenic 74.92	Se Selenium 78.96	Br Bromine 79.90	Kr Krypton 83.80
Rb Rubidium 85.47	Sr Strontium 87.62	Y Yttrium 88.91	Zr Zirconium 91.22	Nb Niobium 92.91	Mo Molybdenum 95.95	Tc Technetium 97.91	Ru Ruthenium 101.1	Rh Rhodium 102.9	Pd Palladium 106.4	Ag Silver 107.9	Cd Cadmium 112.4	In Indium 114.8	Sn Tin 118.7	Sb Antimony 121.8	Te Tellurium 127.6	I Iodine 126.9	Xe Xenon 131.3
Cs Cesium 132.9	Ba Barium 137.3	La Lanthanum 138.9	Hf Hafnium 178.5	Ta Tantalum 180.9	W Tungsten 183.8	Re Rhenium 186.2	Os Osmium 190.2	Ir Iridium 192.2	Pt Platinum 195.1	Au Gold 197.0	Hg Mercury 200.6	Tl Thallium 204.4	Pb Lead 207.2	Bi Bismuth 209.0	Po Polonium 209	At Astatine 210	Rn Radon 222
Fr Francium 223	Ra Radium 226	La Lanthanum 138.9	Hf Hafnium 178.5	Ta Tantalum 180.9	W Tungsten 183.8	Re Rhenium 186.2	Os Osmium 190.2	Ir Iridium 192.2	Pt Platinum 195.1	Au Gold 197.0	Hg Mercury 200.6	Tl Thallium 204.4	Pb Lead 207.2	Bi Bismuth 209.0	Po Polonium 209	At Astatine 210	Rn Radon 222
Ac Actinium 227	Th Thorium 232.0	Pa Protactinium 231.0	U Uranium 238.0	Np Neptunium 237	Pu Plutonium 244	Am Americium 243	Cm Curium 247	Bk Berkelium 247	Cf Californium 251	Es Einsteinium 252	Fm Fermium 257	Md Mendelevium 258	No Nobelium 259	Lr Lawrencium 262	Uu Ununpentium 262	Uub Ununseptium 262	Uuq Ununquadium 262

Lanthanides 6  
Actinides 7

Inner Transition Elements

# Special Families

1  
1A  
Alkali metals

17  
7A  
Halogens

18  
8A  
Noble Gases

2  
2A  
Alkaline Earth Metals

1  
2  
3  
4  
5  
6  
7

1 H Hydrogen 1.008													13 3A	14 4A	15 5A	16 6A	17 7A	2 He Helium 4.003
3 Li Lithium 6.941	4 Be Beryllium 9.012												5 B Boron 10.81	6 C Carbon 12.01	7 N Nitrogen 14.01	8 O Oxygen 16.00	9 F Fluorine 19.00	10 Ne Neon 20.18
11 Na Sodium 22.99	12 Mg Magnesium 24.30	3 3B	4 4B	5 5B	6 6B	7 7B	8 8B	9 8B	10 8B	11 1B	12 2B	13 Al Aluminum 26.98	14 Si Silicon 28.09	15 P Phosphorus 30.97	16 S Sulfur 32.07	17 Cl Chlorine 35.45	18 Ar Argon 39.95	
19 K Potassium 39.10	20 Ca Calcium 40.08	21 Sc Scandium 44.96	22 Ti Titanium 47.87	23 V Vanadium 50.94	24 Cr Chromium 52.00	25 Mn Manganese 54.94	26 Fe Iron 55.84	27 Co Cobalt 58.93	28 Ni Nickel 58.69	29 Cu Copper 63.55	30 Zn Zinc 65.39	31 Ga Gallium 69.72	32 Ge Germanium 72.61	33 As Arsenic 74.92	34 Se Selenium 78.96	35 Br Bromine 79.90	36 Kr Krypton 83.80	
37 Rb Rubidium 85.47	38 Sr Strontium 87.62	39 Y Yttrium 88.91	40 Zr Zirconium 91.22	41 Nb Niobium 92.91	42 Mo Molybdenum 95.95	43 Tc Technetium 97.91	44 Ru Ruthenium 101.1	45 Rh Rhodium 102.9	46 Pd Palladium 106.4	47 Ag Silver 107.9	48 Cd Cadmium 112.4	49 In Indium 114.8	50 Sn Tin 118.7	51 Sb Antimony 121.8	52 Te Tellurium 127.6	53 I Iodine 126.9	54 Xe Xenon 131.3	
55 Cs Cesium 132.9	56 Ba Barium 137.3		72 Hf Hafnium 178.5	73 Ta Tantalum 180.9	74 W Tungsten 183.8	75 Re Rhenium 186.2	76 Os Osmium 190.2	77 Ir Iridium 192.2	78 Pt Platinum 195.1	79 Au Gold 197.0	80 Hg Mercury 200.6	81 Tl Thallium 204.4	82 Pb Lead 207.2	83 Bi Bismuth 209.0	84 Po Polonium 209	85 At Astatine 210	86 Rn Radon 222	
87 Fr Francium 223	88 Ra Radium 226		104 Rf Rutherfordium 261	105 Db Dubnium 262	106 Sg Seaborgium 263	107 Bh Bohrium 262	108 Hs Hassium 265	109 Mt Meitnerium 266	110 Ds Darmstadtium 269	111 Rg Roentgenium 272	112 Cn Copernicium 277	113 Nh Nihonium 289	114 Fl Flerovium 289	115 Mc Moscovium 289	116 Lv Livermorium 289	117 Ts Tennessine 289	118 Og Oganesson 289	
			57 La Lanthanum 138.9	58 Ce Cerium 140.1	59 Pr Praseodymium 140.9	60 Nd Neodymium 144.2	61 Pm Promethium 145	62 Sm Samarium 150.4	63 Eu Europium 152.0	64 Gd Gadolinium 157.2	65 Tb Terbium 158.9	66 Dy Dysprosium 162.5	67 Ho Holmium 164.9	68 Er Erbium 167.3	69 Tm Thulium 168.9	70 Yb Ytterbium 173.0	71 Lu Lutetium 175.0	
			89 Ac Actinium 227	90 Th Thorium 232.0	91 Pa Protactinium 231.0	92 U Uranium 238.0	93 Np Neptunium 237	94 Pu Plutonium 244	95 Am Americium 243	96 Cm Curium 247	97 Bk Berkelium 247	98 Cf Californium 251	99 Es Einsteinium 252	100 Fm Fermium 257	101 Md Mendelevium 258	102 No Nobelium 259	103 Lr Lawrencium 262	

Lanthanides

Actinides

## Element Names & Symbols

Hydrogen H


Carbon C

Oxygen O

Lithium Li

Cobalt

Co



Sodium Na (Natrium - Latin for Salt)

Gold Au (Aurum - Shinning down)


1  
1A

metalloids

non-metals  
→

18  
8A

Metals  
←



1 H Hydrogen 1.008	2 He Helium 4.003											13 3A	14 4A	15 5A	16 6A	17 7A	18 8A																														
3 Li Lithium 6.941	4 Be Beryllium 9.012											5 B Boron 10.81	6 C Carbon 12.01	7 N Nitrogen 14.01	8 O Oxygen 16.00	9 F Fluorine 19.00	10 Ne Neon 20.18																														
11 Na Sodium 22.99	12 Mg Magnesium 24.30	3 3B	4 4B	5 5B	6 6B	7 7B	8 8B	9 8B	10 8B	11 1B	12 2B	13 Al Aluminum 26.98	14 Si Silicon 28.09	15 P Phosphorus 30.97	16 S Sulfur 32.07	17 Cl Chlorine 35.45	18 Ar Argon 39.95																														
19 K Potassium 39.10	20 Ca Calcium 40.08	21 Sc Scandium 44.96	22 Ti Titanium 47.87	23 V Vanadium 50.94	24 Cr Chromium 52.00	25 Mn Manganese 54.94	26 Fe Iron 55.84	27 Co Cobalt 58.93	28 Ni Nickel 58.69	29 Cu Copper 63.55	30 Zn Zinc 65.39	31 Ga Gallium 69.72	32 Ge Germanium 72.61	33 As Arsenic 74.92	34 Se Selenium 78.96	35 Br Bromine 79.90	36 Kr Krypton 83.80																														
37 Rb Rubidium 85.47	38 Sr Strontium 87.62	39 Y Yttrium 88.91	40 Zr Zirconium 91.22	41 Nb Niobium 92.91	42 Mo Molybdenum 95.95	43 Tc Technetium 97.91	44 Ru Ruthenium 101.1	45 Rh Rhodium 102.9	46 Pd Palladium 106.4	47 Ag Silver 107.9	48 Cd Cadmium 112.4	49 In Indium 114.8	50 Sn Tin 118.7	51 Sb Antimony 121.8	52 Te Tellurium 127.6	53 I Iodine 126.9	54 Xe Xenon 131.3																														
55 Cs Cesium 132.9	56 Ba Barium 137.3	<div style="display: flex; align-items: center;"> <div style="margin-right: 10px;">Lanthanides</div> <div style="border-left: 1px solid black; border-right: 1px solid black; border-bottom: 1px solid black; padding: 5px;"> <table border="1" style="font-size: small;"> <tr> <td>72 Hf Hafnium 178.5</td> <td>73 Ta Tantalum 180.9</td> <td>74 W Tungsten 183.8</td> <td>75 Re Rhenium 186.2</td> <td>76 Os Osmium 190.2</td> <td>77 Ir Iridium 192.2</td> <td>78 Pt Platinum 195.1</td> <td>79 Au Gold 197.0</td> <td>80 Hg Mercury 200.6</td> <td>81 Tl Thallium 204.4</td> <td>82 Pb Lead 207.2</td> <td>83 Bi Bismuth 209.0</td> <td>84 Po Polonium 209</td> <td>85 At Astatine 210</td> <td>86 Rn Radon 222</td> </tr> <tr> <td>104 Rf Rutherfordium 261</td> <td>105 Db Dubnium 262</td> <td>106 Sg Seaborgium 263</td> <td>107 Bh Bohrium 262</td> <td>108 Hs Hassium 265</td> <td>109 Mt Meitnerium 266</td> <td>110 Ds Darmstadtium 269</td> <td>111 Rg Roentgenium 272</td> <td>112 Cn Copernicium 277</td> <td>113 Nh Nihonium 289</td> <td>114 Fl Flerovium 289</td> <td>115 Mc Moscovium 289</td> <td>116 Lv Livermorium 289</td> <td>117 Ts Tennessine 289</td> <td>118 Og Oganesson 289</td> </tr> </table> </div> </div>																72 Hf Hafnium 178.5	73 Ta Tantalum 180.9	74 W Tungsten 183.8	75 Re Rhenium 186.2	76 Os Osmium 190.2	77 Ir Iridium 192.2	78 Pt Platinum 195.1	79 Au Gold 197.0	80 Hg Mercury 200.6	81 Tl Thallium 204.4	82 Pb Lead 207.2	83 Bi Bismuth 209.0	84 Po Polonium 209	85 At Astatine 210	86 Rn Radon 222	104 Rf Rutherfordium 261	105 Db Dubnium 262	106 Sg Seaborgium 263	107 Bh Bohrium 262	108 Hs Hassium 265	109 Mt Meitnerium 266	110 Ds Darmstadtium 269	111 Rg Roentgenium 272	112 Cn Copernicium 277	113 Nh Nihonium 289	114 Fl Flerovium 289	115 Mc Moscovium 289	116 Lv Livermorium 289	117 Ts Tennessine 289	118 Og Oganesson 289
72 Hf Hafnium 178.5	73 Ta Tantalum 180.9																	74 W Tungsten 183.8	75 Re Rhenium 186.2	76 Os Osmium 190.2	77 Ir Iridium 192.2	78 Pt Platinum 195.1	79 Au Gold 197.0	80 Hg Mercury 200.6	81 Tl Thallium 204.4	82 Pb Lead 207.2	83 Bi Bismuth 209.0	84 Po Polonium 209	85 At Astatine 210	86 Rn Radon 222																	
104 Rf Rutherfordium 261	105 Db Dubnium 262	106 Sg Seaborgium 263	107 Bh Bohrium 262	108 Hs Hassium 265	109 Mt Meitnerium 266	110 Ds Darmstadtium 269	111 Rg Roentgenium 272	112 Cn Copernicium 277	113 Nh Nihonium 289	114 Fl Flerovium 289	115 Mc Moscovium 289	116 Lv Livermorium 289	117 Ts Tennessine 289	118 Og Oganesson 289																																	
87 Fr Francium 223	88 Ra Radium 226	<div style="display: flex; align-items: center;"> <div style="margin-right: 10px;">Actinides</div> <div style="border-left: 1px solid black; border-right: 1px solid black; border-bottom: 1px solid black; padding: 5px;"> <table border="1" style="font-size: small;"> <tr> <td>57 La Lanthanum 138.9</td> <td>58 Ce Cerium 140.1</td> <td>59 Pr Praseodymium 140.9</td> <td>60 Nd Neodymium 144.2</td> <td>61 Pm Promethium 145</td> <td>62 Sm Samarium 150.4</td> <td>63 Eu Europium 152.0</td> <td>64 Gd Gadolinium 157.2</td> <td>65 Tb Terbium 158.9</td> <td>66 Dy Dysprosium 162.5</td> <td>67 Ho Holmium 164.9</td> <td>68 Er Erbium 167.3</td> <td>69 Tm Thulium 168.9</td> <td>70 Yb Ytterbium 173.0</td> <td>71 Lu Lutetium 175.0</td> </tr> <tr> <td>89 Ac Actinium 227</td> <td>90 Th Thorium 232.0</td> <td>91 Pa Protactinium 231.0</td> <td>92 U Uranium 238.0</td> <td>93 Np Neptunium 237</td> <td>94 Pu Plutonium 244</td> <td>95 Am Americium 243</td> <td>96 Cm Curium 247</td> <td>97 Bk Berkelium 247</td> <td>98 Cf Californium 251</td> <td>99 Es Einsteinium 252</td> <td>100 Fm Fermium 257</td> <td>101 Md Mendelevium 258</td> <td>102 No Nobelium 259</td> <td>103 Lr Lawrencium 262</td> </tr> </table> </div> </div>																57 La Lanthanum 138.9	58 Ce Cerium 140.1	59 Pr Praseodymium 140.9	60 Nd Neodymium 144.2	61 Pm Promethium 145	62 Sm Samarium 150.4	63 Eu Europium 152.0	64 Gd Gadolinium 157.2	65 Tb Terbium 158.9	66 Dy Dysprosium 162.5	67 Ho Holmium 164.9	68 Er Erbium 167.3	69 Tm Thulium 168.9	70 Yb Ytterbium 173.0	71 Lu Lutetium 175.0	89 Ac Actinium 227	90 Th Thorium 232.0	91 Pa Protactinium 231.0	92 U Uranium 238.0	93 Np Neptunium 237	94 Pu Plutonium 244	95 Am Americium 243	96 Cm Curium 247	97 Bk Berkelium 247	98 Cf Californium 251	99 Es Einsteinium 252	100 Fm Fermium 257	101 Md Mendelevium 258	102 No Nobelium 259	103 Lr Lawrencium 262
57 La Lanthanum 138.9	58 Ce Cerium 140.1	59 Pr Praseodymium 140.9	60 Nd Neodymium 144.2	61 Pm Promethium 145	62 Sm Samarium 150.4	63 Eu Europium 152.0	64 Gd Gadolinium 157.2	65 Tb Terbium 158.9	66 Dy Dysprosium 162.5	67 Ho Holmium 164.9	68 Er Erbium 167.3	69 Tm Thulium 168.9	70 Yb Ytterbium 173.0	71 Lu Lutetium 175.0																																	
89 Ac Actinium 227	90 Th Thorium 232.0	91 Pa Protactinium 231.0	92 U Uranium 238.0	93 Np Neptunium 237	94 Pu Plutonium 244	95 Am Americium 243	96 Cm Curium 247	97 Bk Berkelium 247	98 Cf Californium 251	99 Es Einsteinium 252	100 Fm Fermium 257	101 Md Mendelevium 258	102 No Nobelium 259	103 Lr Lawrencium 262																																	

## Metals

Shiny

Malleable (hammered & bent)

Conduct electricity

Conduct heat

most are solids @ room temp & pressure  
(exception mercury  $\Rightarrow$  liquid)

## Non-metals

Dull

Brittle

do not conduct electricity

do not conduct heat

Solids, liquid, gas

## Metalloids

Shiny like metal

Brittle like a non-metal

Semi conduct electricity    Silicon  $\Rightarrow$  Semiconductor

Semi conduct heat

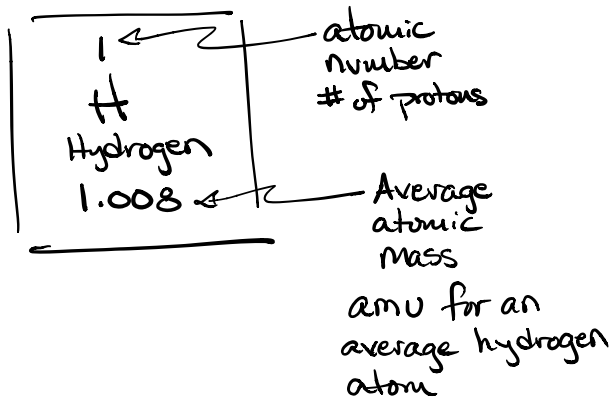
tend to be solids

H<sub>2</sub>O water


Na<sub>2</sub>O

Li<sub>2</sub>O

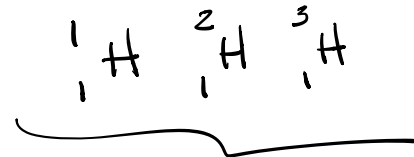
### Periodic Table



### Nuclide Symbol



Hydrogen - mass number



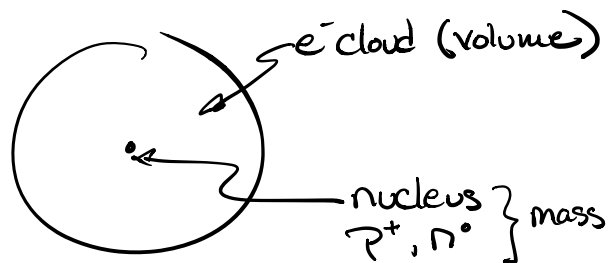
Isotopes

amu = atomic mass unit

1 proton  $\approx$  1 amu

1 neutron  $\approx$  1 amu

1 electron  $\approx$  1/2000 amu



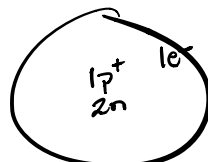
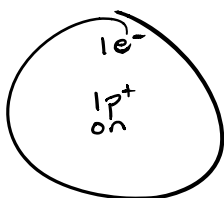


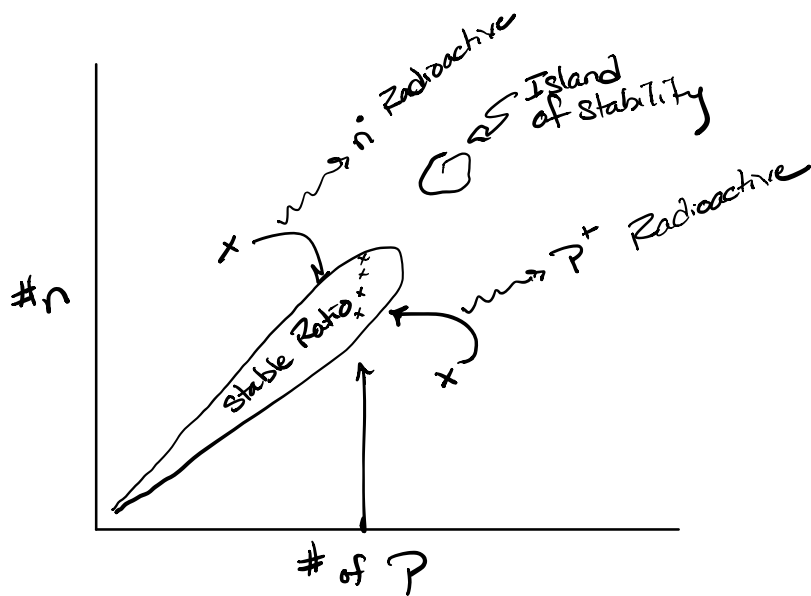
Isotope - A relationship between two or more elements that have the same number of protons but different numbers of neutrons.

# of protons determines the element

### Isotopes of hydrogen

Isotope			
# p <sup>+</sup>	1	1	1
# n <sup>0</sup>	0	2 - 1 = 1	3 - 1 = 2
# e <sup>-</sup>	1		





Examples

<u>Element</u>	<u>Atomic #</u>	<u>P+n</u> <u>mass #</u>	<u>Protons</u>	<u>Neutrons</u>	<u>Electrons</u>
Fluorine	9	(19 - 9)	9	10	9

$mass\# = p + n$   
 $n = mass\# - p$

<u>Isotope Symbol</u>	<u>Protons</u>	<u>Neutrons</u>	<u>Electrons</u>
$^{20}_{9}F$	9	$20 - 9 = 11$	9
$^{44}_{20}Ca$	20	24	20

$^{44}_{20}X = ^{44}_{20}Ca$

1 H Hydrogen 1.008	2 He Helium 4.003											13 3A	14 4A	15 5A	16 6A	17 7A	18 8A
3 Li Lithium 6.941	4 Be Beryllium 9.012											5 B Boron 10.81	6 C Carbon 12.01	7 N Nitrogen 14.01	8 O Oxygen 16.00	9 F Fluorine 19.00	10 Ne Neon 20.18
11 Na Sodium 22.99	12 Mg Magnesium 24.30	3 3B	4 4B	5 5B	6 6B	7 7B	8 8B	9 8B	10 8B	11 1B	12 2B	13 Al Aluminum 26.98	14 Si Silicon 28.09	15 P Phosphorus 30.97	16 S Sulfur 32.07	17 Cl Chlorine 35.45	18 Ar Argon 39.95
19 K Potassium 39.10	20 Ca Calcium 40.08	21 Sc Scandium 44.96	22 Ti Titanium 47.87	23 V Vanadium 50.94	24 Cr Chromium 52.00	25 Mn Manganese 54.94	26 Fe Iron 55.84	27 Co Cobalt 58.93	28 Ni Nickel 58.69	29 Cu Copper 63.55	30 Zn Zinc 65.39	31 Ga Gallium 69.72	32 Ge Germanium 72.61	33 As Arsenic 74.92	34 Se Selenium 78.96	35 Br Bromine 79.90	36 Kr Krypton 83.80
37 Rb Rubidium 85.47	38 Sr Strontium 87.62	39 Y Yttrium 88.91	40 Zr Zirconium 91.22	41 Nb Niobium 92.91	42 Mo Molybdenum 95.95	43 Tc Technetium 97.91	44 Ru Ruthenium 101.1	45 Rh Rhodium 102.9	46 Pd Palladium 106.4	47 Ag Silver 107.9	48 Cd Cadmium 112.4	49 In Indium 114.8	50 Sn Tin 118.7	51 Sb Antimony 121.8	52 Te Tellurium 127.6	53 I Iodine 126.9	54 Xe Xenon 131.3
55 Cs Cesium 132.9	56 Ba Barium 137.3																
87 Fr Francium 223	88 Ra Radium 226																
		72 Hf Hafnium 178.5	73 Ta Tantalum 180.9	74 W Tungsten 183.8	75 Re Rhenium 186.2	76 Os Osmium 190.2	77 Ir Iridium 192.2	78 Pt Platinum 195.1	79 Au Gold 197.0	80 Hg Mercury 200.6	81 Tl Thallium 204.4	82 Pb Lead 207.2	83 Bi Bismuth 209.0	84 Po Polonium 209	85 At Astatine 210	86 Rn Radon 222	
		104 Rf Rutherfordium 261	105 Db Dubnium 262	106 Sg Seaborgium 263	107 Bh Bohrium 262	108 Hs Hassium 265	109 Mt Meitnerium 266	110 Ds Darmstadtium 269	111 Rg Roentgenium 272	112 Cn Copernicium 277	113 Nh Nihonium 289	114 Fl Flerovium 289	115 Mc Moscovium 289	116 Lv Livermorium 289	117 Ts Tennessine 289	118 Og Oganesson 289	
Lanthanides		57 La Lanthanum 138.9	58 Ce Cerium 140.1	59 Pr Praseodymium 140.9	60 Nd Neodymium 144.2	61 Pm Promethium 145	62 Sm Samarium 150.4	63 Eu Europium 152.0	64 Gd Gadolinium 157.2	65 Tb Terbium 158.9	66 Dy Dysprosium 162.5	67 Ho Holmium 164.9	68 Er Erbium 167.3	69 Tm Thulium 168.9	70 Yb Ytterbium 173.0	71 Lu Lutetium 175.0	
Actinides		89 Ac Actinium 227	90 Th Thorium 232.0	91 Pa Protactinium 231.0	92 U Uranium 238.0	93 Np Neptunium 237	94 Pu Plutonium 244	95 Am Americium 243	96 Cm Curium 247	97 Bk Berkelium 247	98 Cf Californium 251	99 Es Einsteinium 252	100 Fm Fermium 257	101 Md Mendelevium 258	102 No Nobelium 259	103 Lr Lawrencium 262	

## Activity 3 - Atoms and Elements

### Goals

- Write the correct symbols or names of some elements.
- Describe some physical properties of the elements you observe.
- Classify an element as a metal or nonmetal from its physical properties or location on the periodic table.
- Write the complete symbol of a nuclide including its mass number and atomic number.
- Use the complete symbol of a nuclide to determine mass number, atomic number, and the number of protons, neutrons and electrons.

### Pre-lab Questions *(answer these on a separate sheet using complete sentences)*

1. What is the periodic table?
2. Where are the alkali metals located on the periodic table? Halogens? Noble gases?
3. Describe the three subatomic particles.
4. How are isotopes alike? Different?

### Concepts to Review

Names and symbols of the elements  
Properties of metals and nonmetals  
Periodic table  
Atoms  
Subatomic particles  
Isotopes

### Introduction

Primary substances, called elements, build all the materials around you. There are 118 elements currently known (see <http://www.webelements.com/>). Some look very different from each other, while others look similar. In this experiment, you will describe the physical properties of some elements in a laboratory display. Then you will show the location of the elements on a blank periodic table.

Metals are elements that are usually shiny, or have a metallic luster. They are usually good conductors of heat and electricity, ductile (can be drawn into a wire), and malleable (can be beaten into sheets). Some of the metals such as sodium or calcium may have a white coating of oxide formed by reacting with oxygen in the air. If the metal were cut, you could see the fresh shiny surface underneath. In contrast, nonmetals are not good conductors of heat and electricity, are brittle (not ductile or malleable), and appear dull, not shiny.

### Atoms

Atoms are made up of smaller bits of matter called **subatomic particles**. Of these, we will consider the protons, neutrons, and electrons. **Protons** are positively charged particles, **electrons** are negatively charged, and **neutrons** are neutral (have no charge). In an atom, the protons and neutrons are tightly packed in a tiny central body called the **nucleus**. Most of the atom is empty space, which contains fast-moving electrons. Electrons are so small that their mass is nearly negligible compared to the mass of the proton or neutron.

Every atom is identified by its atomic number and mass number. The **atomic number** is equal to the number of protons in the nucleus, which is the same as the nuclear charge. The **mass number** of an atom is the sum of the number of protons and neutrons, and is usually not equal to the exact measured mass of the atom.

**atomic number** = number of protons ( $p^+$ )

**mass number** = sum of the number of protons and neutrons ( $p^+ + n^0$ )

In a **neutral atom** (as opposed to an **ion**), the number of electrons is equal to the number of protons. Protons attract electrons because they have opposite charges.

$$\text{number of protons (\#p}^+) = \text{number of electrons (\#e}^-)$$

### Isotopes

There are different versions of atoms for each of the elements. **Isotopes** are types of atoms of the same element that differ in the number of neutrons they contain. This means that isotopes of an element have the same number of protons, but different mass numbers. The following example represents the symbol of a sulfur nuclide that has 16 protons and 18 neutrons.

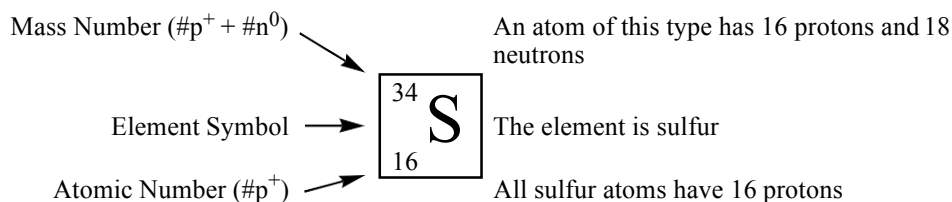


Figure 1. Complete symbol of a nuclide and the meaning of each component.

### Periodic Table

The periodic table shown in Figure 2 contains information about each of the elements. The horizontal rows of the table are called **periods**, and the vertical columns are called **groups**. Each group contains elements that have similar physical and chemical properties. The groups are numbered across the top of the chart. Elements in Group 1A are the **alkali metals**, elements in Group 2A are the **alkaline earths**, and Group 7A contains the **halogens**. Group 8A contains the **noble gases**, which are elements that are generally unreactive with other elements. A zigzag line that looks like a staircase separates the metals on the left side from the nonmetals on the right side.

1 1A																		18 8A	
1 H	2 2A																		2 He
3 Li	4 Be																		
11 Na	12 Mg	3 3B	4 4B	5 5B	6 6B	7 7B	8 8B	9 8B	10 8B	11 1B	12 2B	13 Al	14 Si	15 P	16 S	17 Cl	18 Ar		
19 K	20 Ca	21 Sc	22 Ti	23 V	24 Cr	25 Mn	26 Fe	27 Co	28 Ni	29 Cu	30 Zn	31 Ga	32 Ge	33 As	34 Se	35 Br	36 Kr		
37 Rb	38 Sr	39 Y	40 Zr	41 Nb	42 Mo	43 Tc	44 Ru	45 Rh	46 Pd	47 Ag	48 Cd	49 In	50 Sn	51 Sb	52 Te	53 I	54 Xe		

Figure 2. The atomic numbers and symbols of some elements on the periodic table.

---



---

### Materials

A display of samples of elements (metals and nonmetals), colored pencils.

---



---

## **Experimental Procedure**

### **A. Physical Properties of Elements**

Observe the elements in the laboratory display. In the worksheet provided, write the symbol and atomic number for each element listed. Describe a selection of physical properties such as color and luster. From your observations, identify each element as a metal, nonmetal, or metalloid.

### **B. Metals and Nonmetals on the Periodic Table**

On the incomplete periodic table in Figure 3, write the symbols of the missing elements. Use your text or a periodic table in the laboratory as a reference. Write the group number at the top of each column of the representative (main group) elements. Using different colors, indicate the alkali metals, alkaline earth metals, halogens and noble gases. Write the period numbers for the horizontal rows shown. Outline and label the areas occupied by the metals, nonmetals, and metalloids.







## Exercise B.

Complete the following periodic table *as stated in the instructions to part B*. (Label your periodic table with period numbers, group numbers 1A-8A, metals vs. non-metals, and indicate the alkali metals, alkaline earth metals, halogens, and noble gases.)

1																
3	4											5	6	7	8	
11	12											13	14	15	16	
19	20	21 Sc	22 Ti	23 V	24 Cr	25 Mn	26	27	28	29	30	31 Ga	32 Ge	33 As	34 Se	
37 Rb	38 Sr	39 Y	40 Zr	41 Nb	42 Mo	43 Tc	44 Ru	45 Rh	46 Pd	47 Ag	48 Cd	49 In	50	51 Sb	52 Te	
55 Cs	56	57 La	72 Hf	73 Ta	74 W	75 Re	76 Os	77 Ir	78 Pt	79	80	81 Tl	82	83 Bi	84 Po	

Figure 3. Metals, Nonmetals, and Metalloids on the periodic table.

-

2  
6

-

## Questions and Problems

1. Complete the following table. All atoms are to be considered neutral (not ions).

Element	Atomic Number	Mass Number	Protons	Neutrons	Electrons
Fluorine		19			
Iron				30	
		27			13
			19	20	
Bromine		80			
Gold		197			
			53	74	

2. Complete the following table:

Isotope symbol	Protons	Neutrons	Electrons
${}^{40}_{20}\text{Ca}$			
	20	22	20
${}^{40}_{19}\text{K}$			
	20	24	20
${}^{46}_{20}\text{Ca}$			

3. Complete the list of names of elements and symbols:

Name of Element	Symbol	Name of Element	Symbol
Potassium			Na
Sulfur			P
Nitrogen			Fe
Magnesium			Cl
Copper			Ag

4. On the following list of elements, circle the symbols of the transition metals and underline the symbols of the halogens:

Mg    Cu    Br    Ag    Ni    Cl    Fe    F    I    B    Na

5. Give the name of each of the following elements:

a. Noble gas in Period 2 \_\_\_\_\_

b. Halogen in Period 2 \_\_\_\_\_

c. Alkali metal in Period 3 \_\_\_\_\_

d. Halogen in Period 3 \_\_\_\_\_

e. Alkali metal in Period 4 \_\_\_\_\_

*metal non-metal*

6. From their positions on the periodic table, indicate by circling "M" or "NM" whether the following elements are metals or nonmetals:

Na            M    NM            S            M    NM            Cu            M    NM

F            M    NM            Fe            M    NM            C            M    NM

Ca            M    NM            O            M    NM            Zn            M    NM

7. Consider the element chlorine:

- a. Explain how you would determine the number of neutrons in a chlorine atom that has a mass number of 37.

*<sup>37</sup>Cl = how many neutrons*

- b. Another atom of chlorine has a mass number of 35. How does it compare to the above atom of chlorine?

8. A neutral atom has a mass number of 80 and 45 neutrons. Write its complete isotope symbol.

9. An atom has eleven more protons and fifteen more neutrons than the atom in Question 8. Write the isotope symbol that describes this atom.